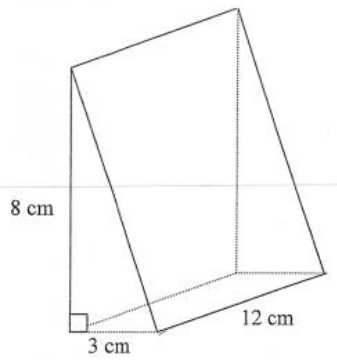


Unit 12- Worksheet #2: Surface Area of Prisms and Cylinders

Name and determine the surface area for each of the following figures.

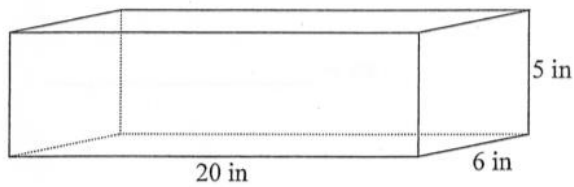
1.



Name: _____

SA= _____

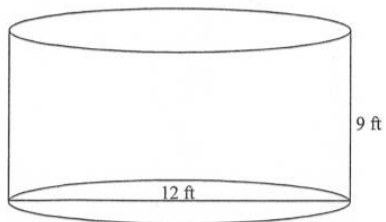
2.



Name: _____

SA= _____

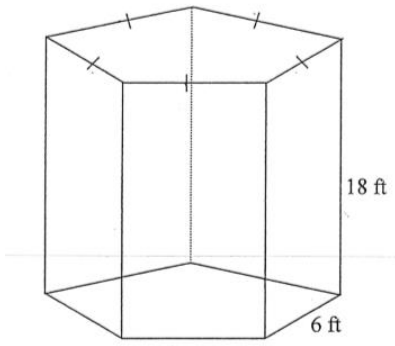
3.



Name: _____

SA= _____

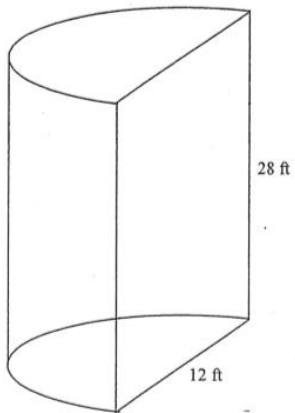
4.



Name: _____

SA= _____

5.



Name: _____

SA= _____